

Welke plattegrond hoort bij het gebouw?

3	2	4
2	1	4
1	3	1

A

3	2	4
2	2	4
1	3	1

B


3	2	4
2	1	1
1	3	0

C


3	2	4
2	2	1
1	3	0

D


Welke dobbelsteen hoort er bij?




A



B



C



D

€ 34,95



Oefenboeken van Junior Einstein

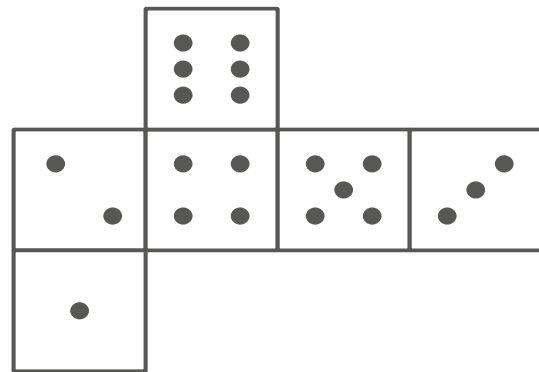
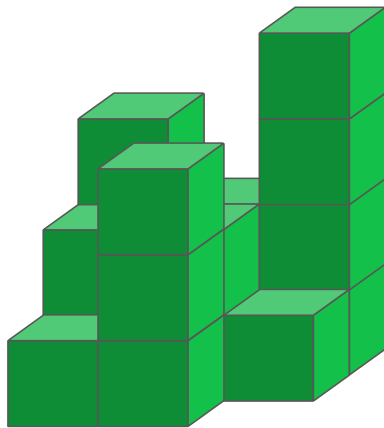
De beste voorbereiding op de Doorstroomtoets

+ online uitleg bij elke vraag



Scan & bestel direct!





Welke plattegrond hoort bij het gebouw?

3	2	4
2	1	4
1	3	1

A

3	2	4
2	2	4
1	3	1

B


3	2	4
2	1	1
1	3	0

C


3	2	4
2	2	1
1	3	0

D


Welke dobbelsteen hoort er bij?




A



B



C



D

€ 34,95



Oefenboeken van Junior Einstein

De beste voorbereiding op de Doorstroomtoets

+ online uitleg bij elke vraag



Scan & bestel direct!

